







How many?

Count the objects and write the numbers (1-10) in the box

	<input data-bbox="1165 405 1434 694" type="text"/>
	<input data-bbox="1165 694 1434 983" type="text"/>
	<input data-bbox="1165 983 1434 1272" type="text"/>
	<input data-bbox="1165 1272 1434 1561" type="text"/>
	<input data-bbox="1165 1561 1434 1850" type="text"/>
	<input data-bbox="1165 1850 1434 2132" type="text"/>