







How many?

Count the objects and write the numbers (1-10) in the box

| | |
|--|--|
|  | <input data-bbox="1173 448 1396 660" type="text"/> |
|  | <input data-bbox="1173 739 1396 952" type="text"/> |
|  | <input data-bbox="1173 1019 1396 1232" type="text"/> |
|  | <input data-bbox="1173 1310 1396 1523" type="text"/> |
|  | <input data-bbox="1173 1601 1396 1814" type="text"/> |
|  | <input data-bbox="1173 1892 1396 2105" type="text"/> |