































Missing Numbers

Write the missing numbers from 31- 60.

				
<input type="text"/>	<input type="text"/>	33	<input type="text"/>	<input type="text"/>
				
<input type="text"/>	37	<input type="text"/>	<input type="text"/>	<input type="text"/>
				
<input type="text"/>	<input type="text"/>	<input type="text"/>	44	<input type="text"/>
				
46	<input type="text"/>	<input type="text"/>	<input type="text"/>	<input type="text"/>
				
<input type="text"/>	<input type="text"/>	<input type="text"/>	49	<input type="text"/>
				
<input type="text"/>	57	<input type="text"/>	<input type="text"/>	<input type="text"/>