



Sides and Corners

Write the number of sides and corners for the given shapes.



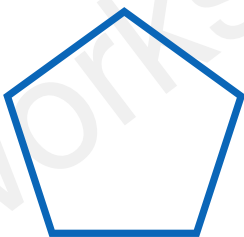
Sides

Corners



Sides

Corners



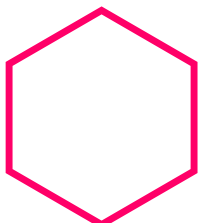
Sides

Corners



Sides

Corners



Sides

Corners