






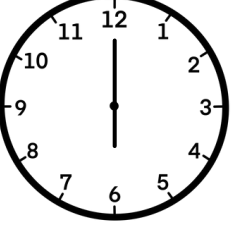




# Time

Look at the clocks and circle the correct time.

 <p>two o'clock</p> <p>twelve o'clock</p>	 <p>nine o'clock</p> <p>eight o'clock</p>
 <p>eleven o'clock</p> <p>ten o'clock</p>	 <p>three o'clock</p> <p>seven o'clock</p>
 <p>five o'clock</p> <p>four o'clock</p>	 <p>nine o'clock</p> <p>eight o'clock</p>
 <p>seven o'clock</p> <p>six o'clock</p>	 <p>five o'clock</p> <p>six o'clock</p>
 <p>one o'clock</p> <p>four o'clock</p>	 <p>five o'clock</p> <p>nine o'clock</p>